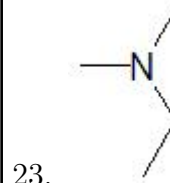
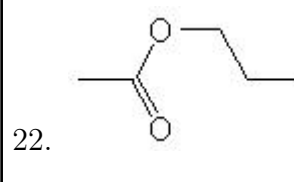
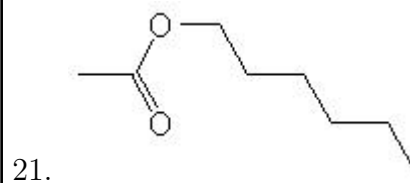
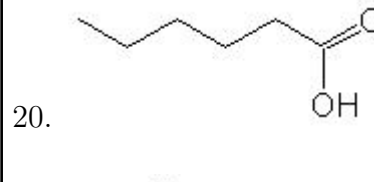
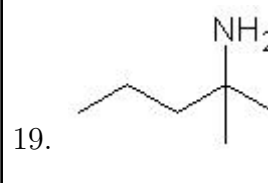
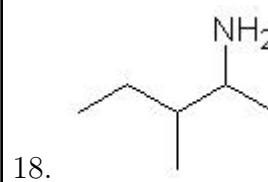
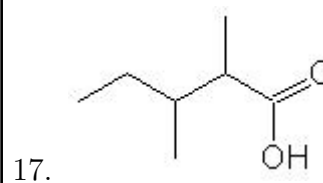
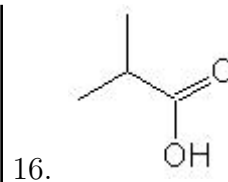
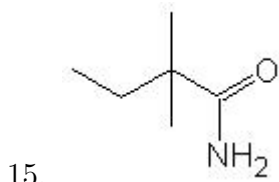
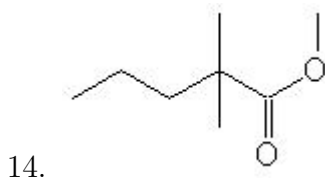
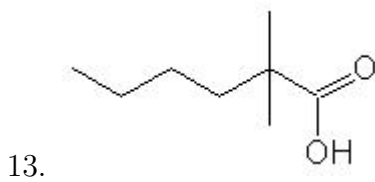
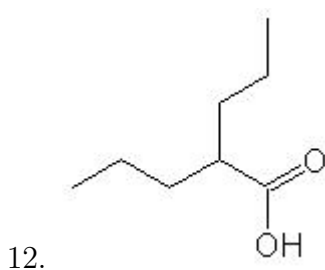
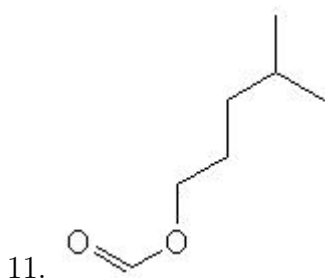
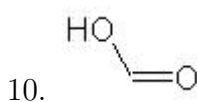
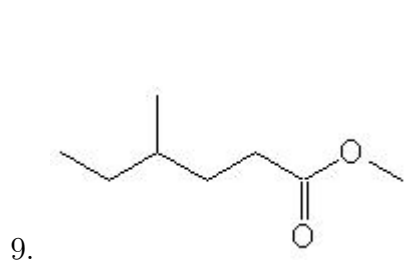
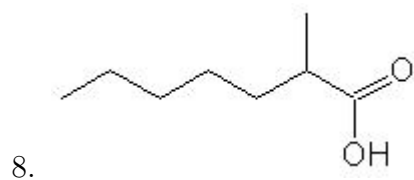
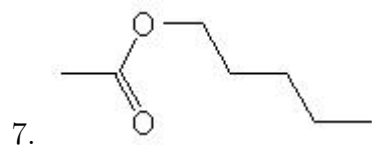
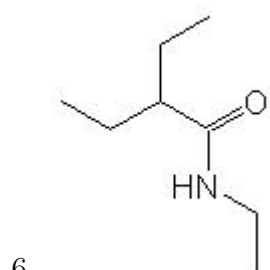
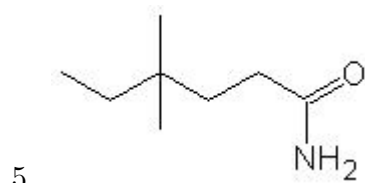
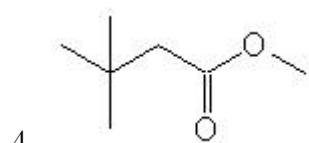
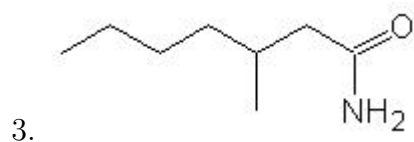
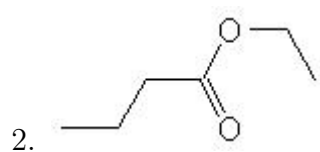
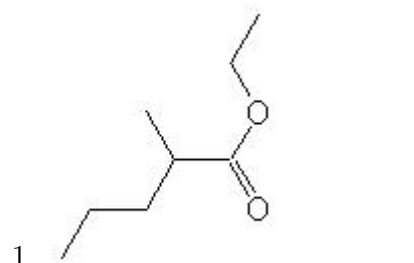


Name: _____

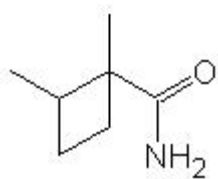
Class: _____

Date: _____

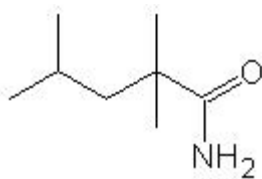
Name the following molecules using IUPAC nomenclature:



24.



25.



- Question 1: ethyl 2-methylpentanoate
- Question 2: ethyl butanoate
- Question 3: 3-methylheptanamide
- Question 4: methyl 3,3-dimethylbutanoate
- Question 5: 4,4-dimethylhexanamide
- Question 6: N,2-diethylbutanamide
- Question 7: pentyl ethanoate
- Question 8: 2-methylheptanoic acid
- Question 9: methyl 4-methylhexanoate
- Question 10: methanoic acid
- Question 11: 4-methylpentyl methanoate
- Question 12: 2-propylpentanoic acid
- Question 13: 2,2-dimethylhexanoic acid
- Question 14: methyl 2,2-dimethylpentanoate
- Question 15: 2,2-dimethylbutanamide
- Question 16: 2-methylpropanoic acid
- Question 17: 2,3-dimethylpentanoic acid
- Question 18: 3-methyl-2-pentanamine
- Question 19: 2-methyl-2-pentanamine
- Question 20: hexanoic acid
- Question 21: hexyl ethanoate
- Question 22: propyl ethanoate
- Question 23: N-ethyl-N-methylmethanamine
- Question 24: 2-ethyl-2,3-dimethylbutanamide
- Question 25: 2,2,4-trimethylpentanamide