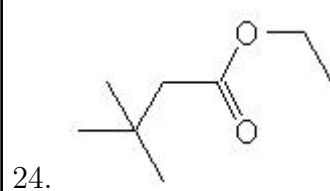
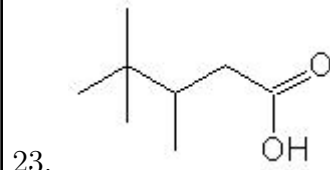
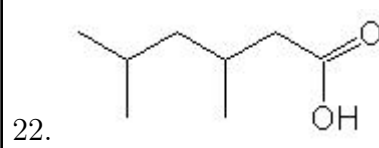
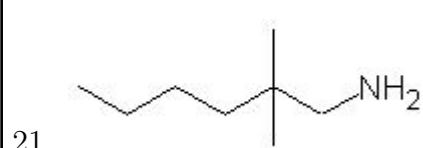
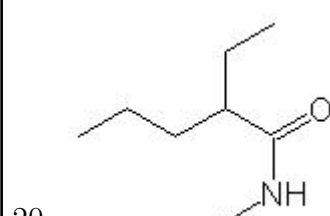
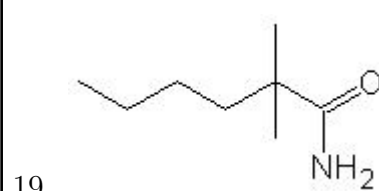
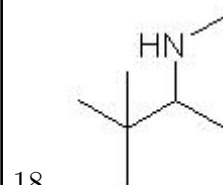
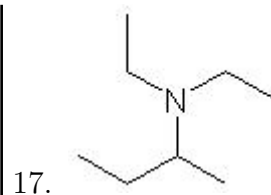
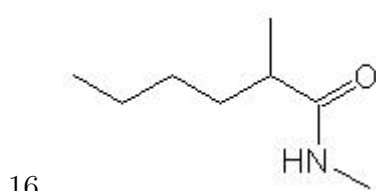
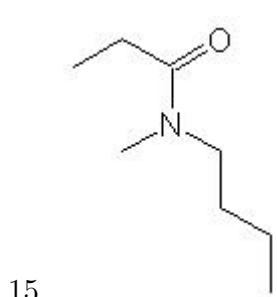
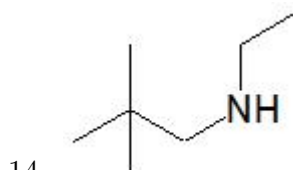
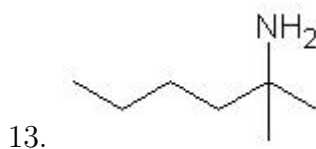
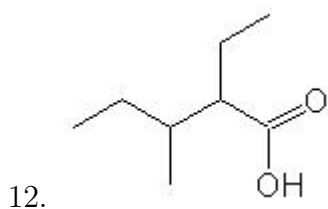
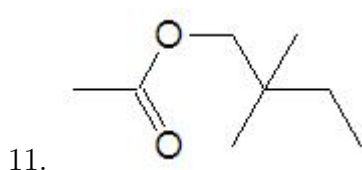
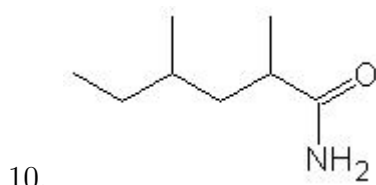
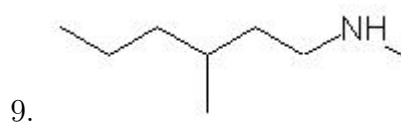
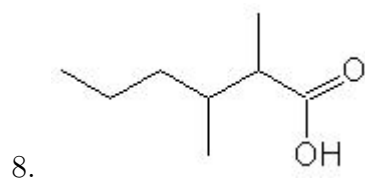
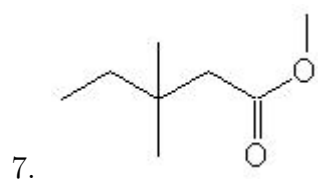
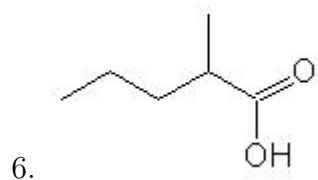
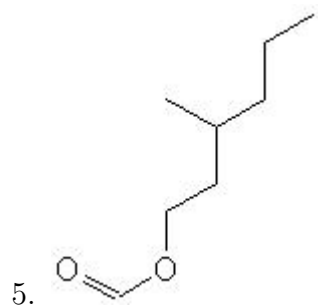
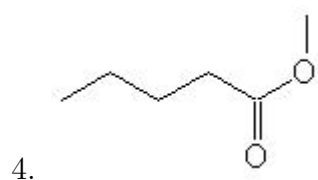
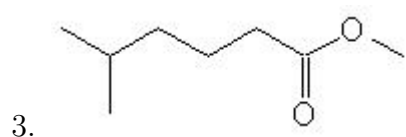
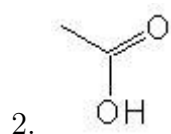
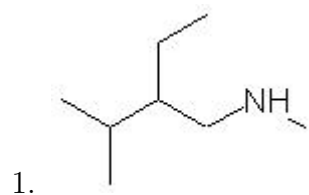


Name: _____

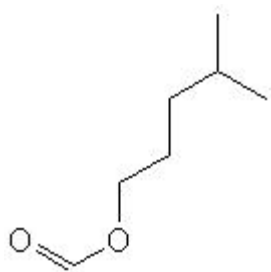
Class: _____

Date: _____

Name the following molecules using IUPAC nomenclature:



25.



- Question 1: 2-ethyl-N,3-dimethyl-1-butanamine
- Question 2: ethanoic acid
- Question 3: methyl 5-methylhexanoate
- Question 4: methyl pentanoate
- Question 5: 3-methylhexyl methanoate
- Question 6: 2-methylpentanoic acid
- Question 7: methyl 3,3-dimethylpentanoate
- Question 8: 2,3-dimethylhexanoic acid
- Question 9: N,3-dimethyl-1-hexanamine
- Question 10: 2,4-dimethylhexanamide
- Question 11: 2,2-dimethylbutyl ethanoate
- Question 12: 2-ethyl-3-methylpentanoic acid
- Question 13: 2-methyl-2-hexanamine
- Question 14: N-ethyl-2,2-dimethyl-1-propanamine
- Question 15: N-butyl-N-methylpropanamide
- Question 16: N,2-dimethylhexanamide
- Question 17: N,N-diethyl-2-butanamine
- Question 18: N,3,3-trimethyl-2-butanamine
- Question 19: 2,2-dimethylhexanamide
- Question 20: 2-ethyl-N-methylpentanamide
- Question 21: 2,2-dimethyl-1-hexanamine
- Question 22: 3,5-dimethylhexanoic acid
- Question 23: 3,4,4-trimethylpentanoic acid
- Question 24: ethyl 3,3-dimethylbutanoate
- Question 25: 4-methylpentyl methanoate