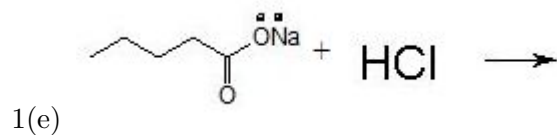
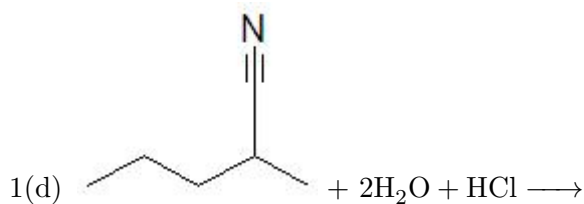
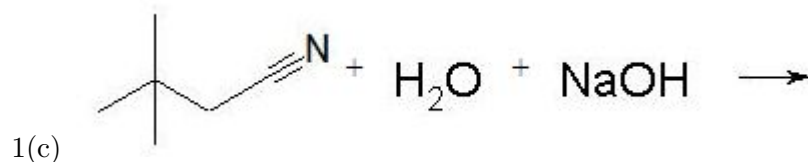
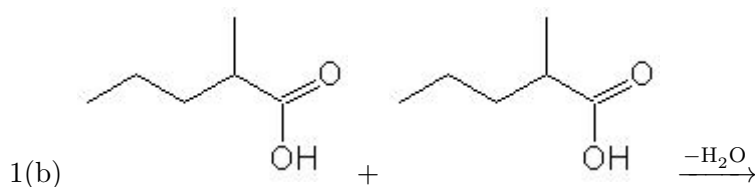
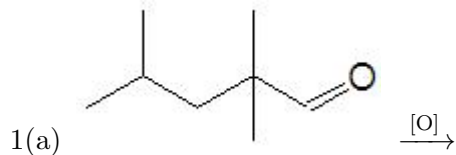


Name: _____

Date: _____

- [30 pt] 1. Complete the following reactions by filling in the missing reactants or products. You should answer each part in the format the reaction is presented in. If "No Reaction" occurs write NR in space. Circle the major organic product where applicable.



CHE 102 - Homework - Ch 24b

