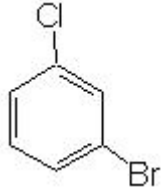
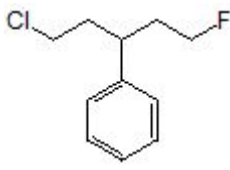
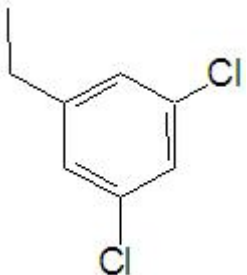
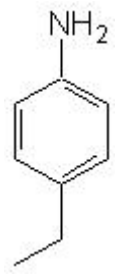
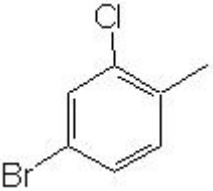
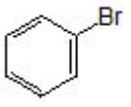
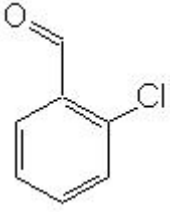
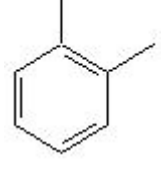
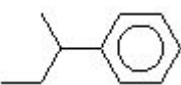
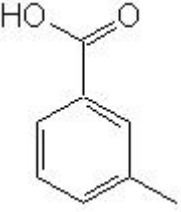


Name: _____

Date: _____

[20 pt] 1. Name the following molecules using IUPAC nomenclature:

(a) 	(b) 
(c) 	(d) 
(e) 	(f) 
(g) 	(h) 
(i) 	(j) 

CHE 102 - Homework - Ch 20c

[20 pt] 2. Draw the following molecules using Lewis Structure or Line Drawings:

(a) 1,2-dichloro-4-iodobenzene	(b) nitrobenzene
(c) 1-bromo-3-chloro-5-iodobenzene	(d) o-bromoaniline
(e) 1,5-diphenyl-3-heptyne	(f) p-ethylpropylbenzene
(g) 3-ethyl-4-phenyl-2-heptene	(h) 1,2-dibromobenzene
(i) 2,3-diethylaniline	(j) m-nitrobenzoic acid