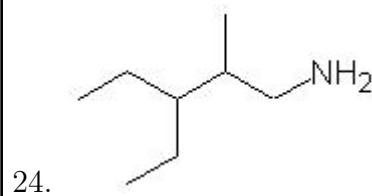
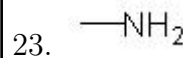
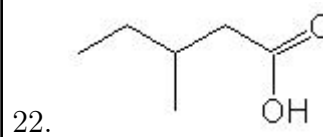
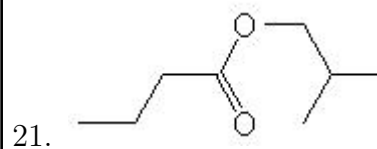
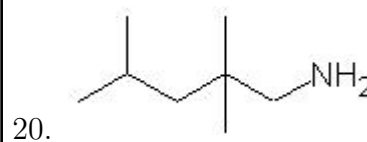
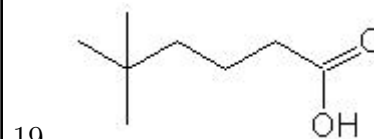
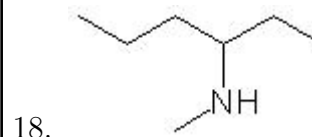
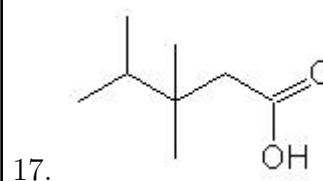
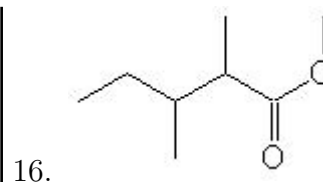
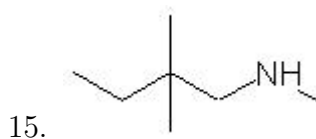
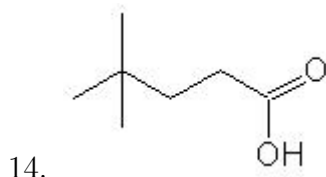
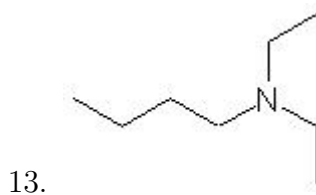
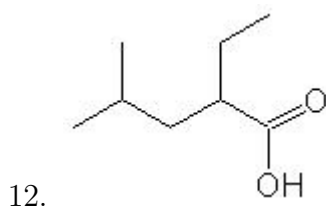
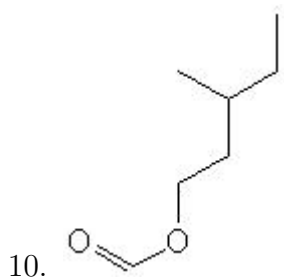
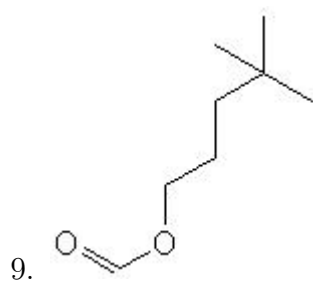
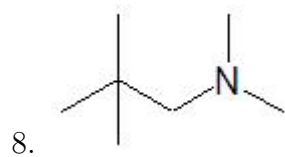
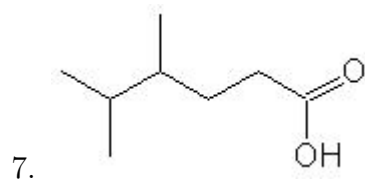
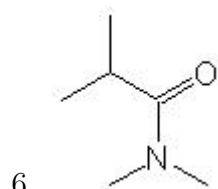
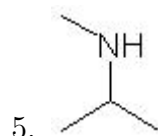
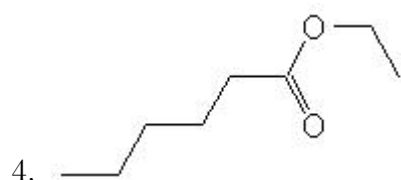
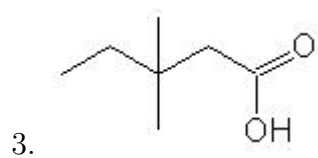
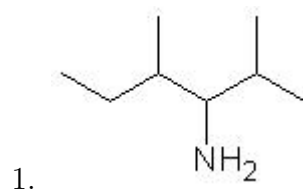


Name: _____

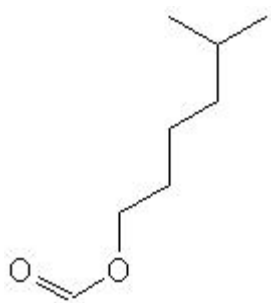
Class: _____

Date: _____

Name the following molecules using IUPAC nomenclature:



25.



|

|

- Question 1: 2,4-dimethyl-3-hexanamine
- Question 2: 6-methyl-2-heptanamine
- Question 3: 3,3-dimethylpentanoic acid
- Question 4: ethyl hexanoate
- Question 5: N-methyl-2-propanamine
- Question 6: N,N-dimethyl-2methylpropanamide
- Question 7: 4,5-dimethylhexanoic acid
- Question 8: N,N-dimethyl-2,2-dimethyl-1-propanamine
- Question 9: 4,4-dimethylpentyl methanoate
- Question 10: 3-methylpentyl methanoate
- Question 11: N,N-dimethyl-1-pentanamine
- Question 12: 2-ethyl-4-methylpentanoic acid
- Question 13: N,N-diethyl-1-butanamine
- Question 14: 4,4-dimethylpentanoic acid
- Question 15: N-methyl-2,2-dimethyl-1-butanamine
- Question 16: methyl 2,3-dimethylpentanoate
- Question 17: 3,3,4-trimethylpentanoic acid
- Question 18: N-methyl-3-hexanamine
- Question 19: 5,5-dimethylhexanoic acid
- Question 20: 2,2,4-trimethyl-1-pentanamine
- Question 21: 2-methylpropyl butanoate
- Question 22: 3-methylpentanoic acid
- Question 23: methanamine
- Question 24: 3-ethyl-2-methyl-1-pentanamine
- Question 25: 5-methylhexyl methanoate