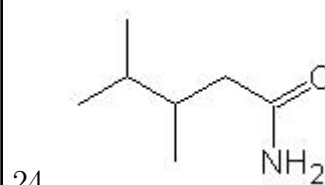
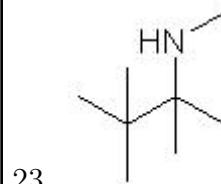
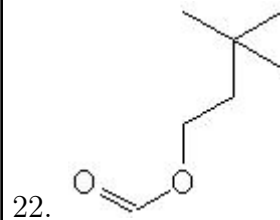
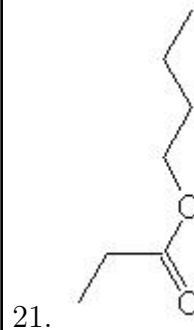
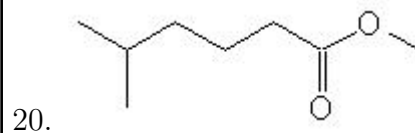
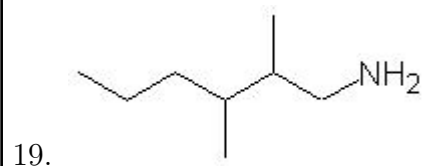
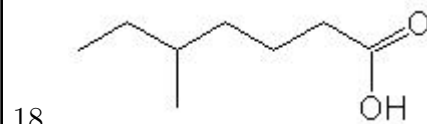
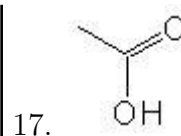
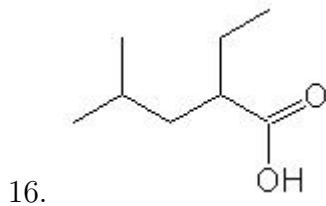
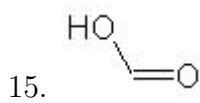
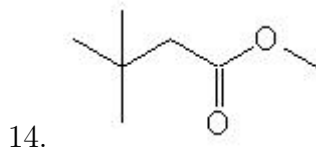
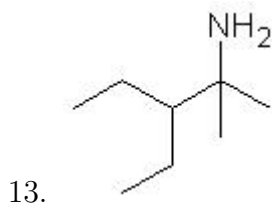
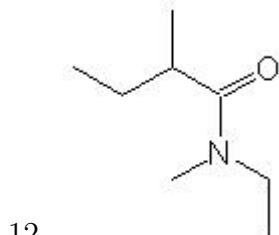
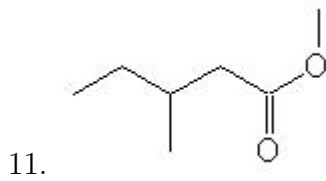
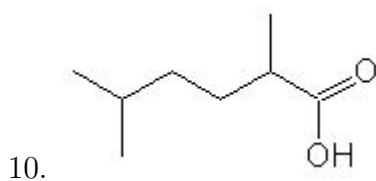
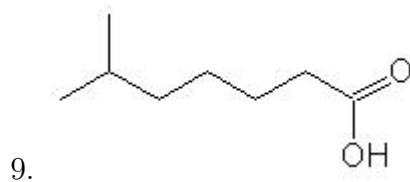
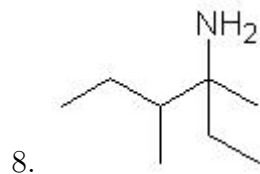
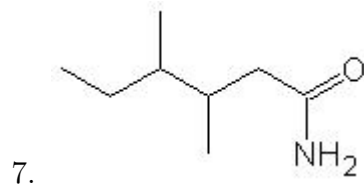
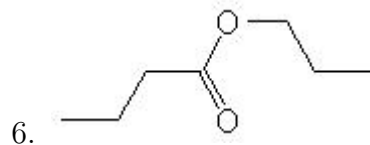
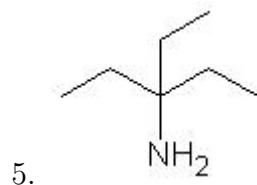
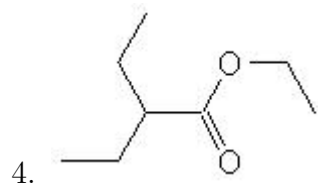
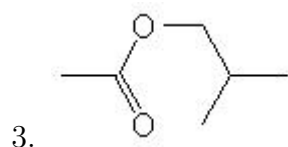
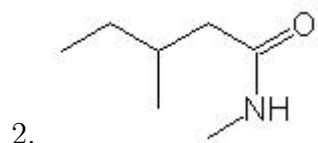
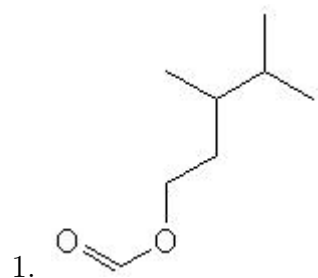


Name: _____

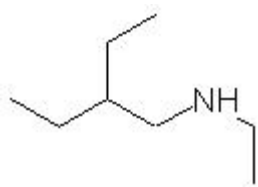
Class: _____

Date: _____

Name the following molecules using IUPAC nomenclature:



25.



|

|

- Question 1: 3,4-dimethylpentyl methanoate
- Question 2: N-methyl-3-methylpentanamide
- Question 3: 2,2-dimethylethyl ethanoate
- Question 4: ethyl 2-ethylbutanoate
- Question 5: 3-ethyl-3-pentanamine
- Question 6: propyl butanoate
- Question 7: 3,4-dimethylhexanamide
- Question 8: 2-ethyl-3-methyl-2-pentanamine
- Question 9: 6-methylheptanoic acid
- Question 10: 2,5-dimethylhexanoic acid
- Question 11: methyl 3-methylpentanoate
- Question 12: N-ethyl-N-methyl-2-methylbutanamide
- Question 13: 3-ethyl-2-methyl-2-pentanamine
- Question 14: methyl 3,3-dimethylbutanoate
- Question 15: methanoic acid
- Question 16: 2-ethyl-4-methylpentanoic acid
- Question 17: ethanoic acid
- Question 18: 5-methylheptanoic acid
- Question 19: 2,3-dimethyl-1-hexanamine
- Question 20: methyl 5-methylhexanoate
- Question 21: butyl propanoate
- Question 22: 3,3-dimethylbutyl methanoate
- Question 23: N-methyl-2,3,3-trimethyl-2-butanamine
- Question 24: 3,4-dimethylpentanamide
- Question 25: N-ethyl-2-ethyl-1-butanamine