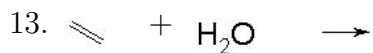
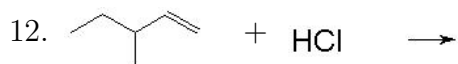
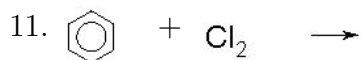
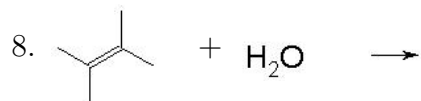
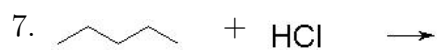
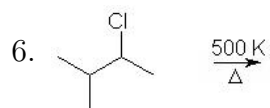
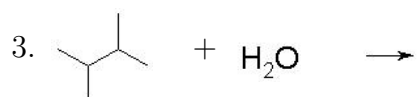
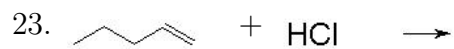
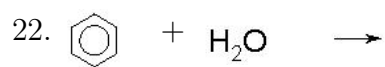
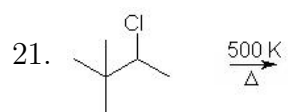
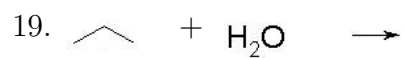
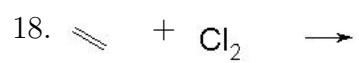


Complete the following reactions. Circle the most favored products.





Question 1: $\underline{\quad}$ $\text{CO}_2(\text{g}) + \underline{\quad}$ $\text{H}_2\text{O}(\text{g}) + \text{Heat}$ Balance: (1,9,6,6)

